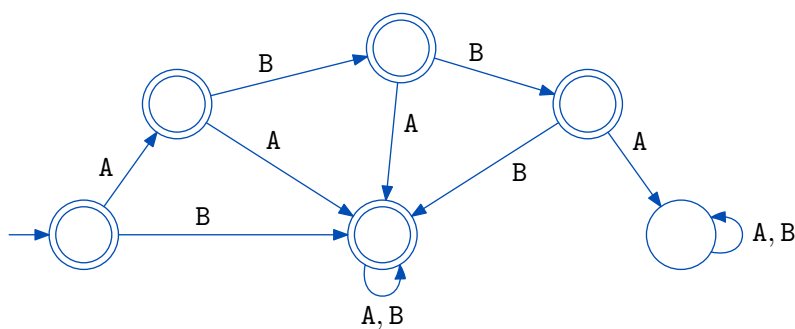
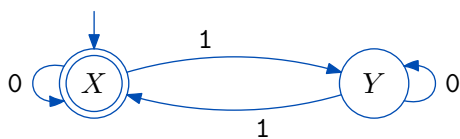


## In-class Practice 2: Finite Automata

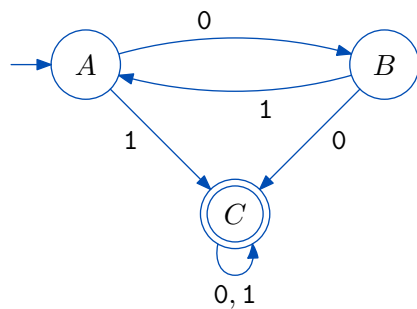
Determine the language of each of the following FAs:



All strings of A and B that do not start ABBA



All strings of 0s and 1s with an even number of 1s (including zero 1s)



All strings of 0s and 1s starting with 1 or containing a double bit